

**INDIAN SCHOOL MUSCAT
PRIMARY SECTION**


Subject : MATHS	Practice Worksheet	Name :
Topic : Time	Class: III Sec :	Date : / / 2019
Resource Person : Ms .Ramya Vijay		Teacher's Sign :

I. Fill in the blanks.


- a) Quarter of an hour is _____ minutes.
- b) 1 year = _____ months.
- c) 6 hours = _____ minutes.
- d) 8'o clock in the morning = _____ (a.m. /p.m.) .

II. Draw hands to show the time.

a) Quarter past 10



b) 6:25



**INDIAN SCHOOL MUSCAT
PRIMARY SECTION**


Subject : MATHS	Practice Worksheet	Name :
Topic : Time	Class: III Sec :	Date : / / 2019
Resource Person : Ms .Ramya Vijay		Teacher's Sign :

I. Fill in the blanks.


- a) Quarter of an hour is _____ minutes.
- b) 1 year = _____ months.
- c) 6 hours = _____ minutes.
- d) 8'o clock in the morning = _____ (a.m. /p.m.).

II. Draw hands to show the time.

a) Quarter past 10



b) 6:25



III. Do as directed.

1. Write the time shown by the clocks in two ways.

a.



b.



2. Convert into days .

a. 4 years

b. 9 months

3. Convert into hours.

a. 10 days

b. 7 days 15 hours

III. Do as directed.

1. Write the time shown by the clocks in two ways.

a.



b.



2. Convert into days.

a. 4 years

b. 9 months

3. Convert into hours.

a. 10 days

b. 7 days 15 hours